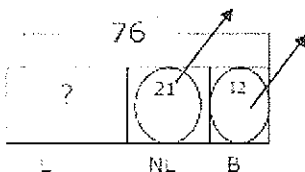
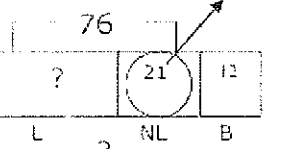
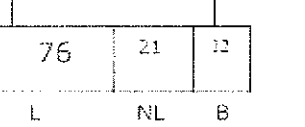
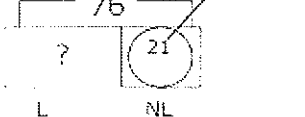


4<sup>th</sup> Grade Math Homework

September 13, 2016

Name: \_\_\_\_\_

Kenny bought 76 mechanical pencils because they were on sale at Target. He gave 12 to his brother and ran out of lead for 21 of them. Which model below could represent how to find how many mechanical pencils Kenny still has with lead?

- A. K.P. 
- B. K.P. 
- C. K.P. 
- D. K.P. 

Destiny is measuring the depths at various lakes. Lake Travis is 632 feet deep, while Lake Houston is 557 feet deep. What is the difference between the depths of both lakes?

Penny had 275 marbles. She lost 117 of them. She gave 24 of the marbles to a friend. Write a number sentence that can be used to find how many marbles she has now.

Mrs. Wade bought 125 apples on Monday, 468 oranges on Tuesday, 382 peaches on Wednesday, and 67 mangos on Thursday. About how much fruit did Mrs. Wade buy if you rounded to the nearest 10?

\_\_\_\_\_

How many marbles does Penny have now?